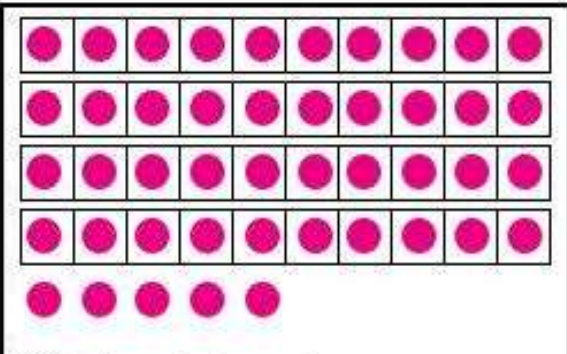



-Βρες τον αριθμό με δεκάδες και μονάδες!

1.



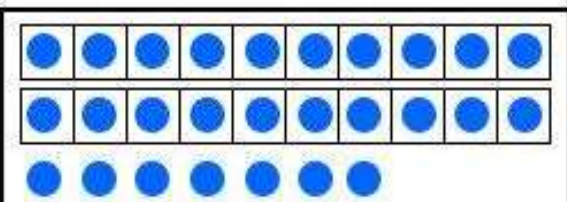
Blank box for the answer.

4.



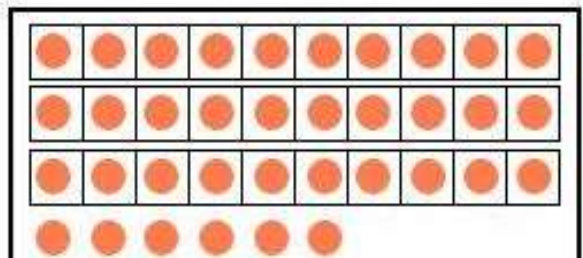
Blank box for the answer.

2.



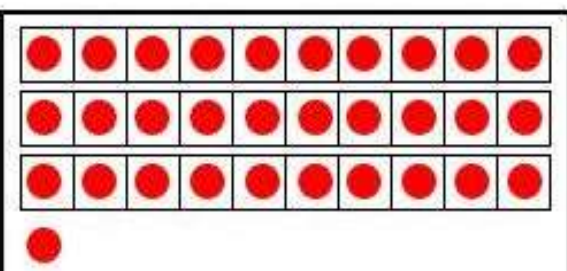
Blank box for the answer.

5.



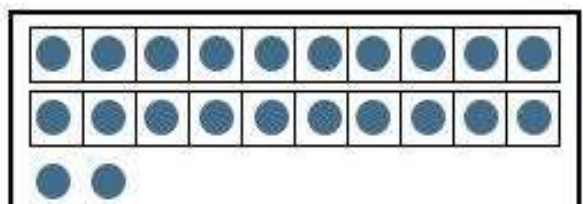
Blank box for the answer.

3.



Blank box for the answer.

6.



Blank box for the answer.

Όνομα: _____ Τάξη: _____

Πόσες Δεκάδες και πόσες Μονάδες έχει ο αριθμός;

53

=

21

=

49

=

72

=

86

=

50

=

18

=

Όνομα: _____ Τάξη: _____

Όνομα: _____

9

Υπολόγισε τις δεκάδες!

Ζωγράφισε ή διέγραψε τις δεκάδες που πρέπει για να σε βοηθήσει να υπολογίσεις.

$30 + 10 = \dots$



$30 - 20 = \dots$



$40 + 10 = \dots$



$20 - 10 = \dots$




$20 + 20 = \dots$



$30 - 10 = \dots$



$30 + 30 = \dots$



$40 - 10 = \dots$



istories-takes

Όνομα: _____ Τάξη: _____