



1. Βάλε τους αριθμούς στη σειρά ξεκινώντας από το μεγαλύτερο


34	87	91
	35	81
23	64	66




2. Χρωμάτισε τα κουτάκια και φτιάξε τους αριθμούς



23



45



61

3. Βρες τις απαντήσεις

$10 + 10 = \underline{\quad}$

$20 + 10 = \underline{\quad}$

$20 + 20 = \underline{\quad}$

$10 + 20 = \underline{\quad}$

$30 + 10 = \underline{\quad}$

$20 + 30 = \underline{\quad}$

$50 + 20 = \underline{\quad}$

$10 + 40 = \underline{\quad}$

$70 + 20 = \underline{\quad}$

$20 + 80 = \underline{\quad}$

$10 + 90 = \underline{\quad}$

$50 + 50 = \underline{\quad}$

$50 + 10 = \underline{\quad}$

$30 + 10 = \underline{\quad}$

$40 + 20 = \underline{\quad}$

$10 + 70 = \underline{\quad}$

$10 + 10 + 10 = \underline{\quad}$

$30 + 20 + 10 = \underline{\quad}$

$20 + 20 + 40 = \underline{\quad}$

$10 + 50 + 10 = \underline{\quad}$

$20 + 30 + 20 = \underline{\quad}$

$10 + 20 + 10 = \underline{\quad}$

$10 + 30 + 10 = \underline{\quad}$

$20 + 10 + 20 = \underline{\quad}$

$30 + 30 + 30 = \underline{\quad}$

Όνομα: _____ Τάξη: _____ Ημερ. _____