



ΔΗΜΟΤΙΚΟ ΣΧΟΛΕΙΟ

Όνομα: _____ Τάξη: _____

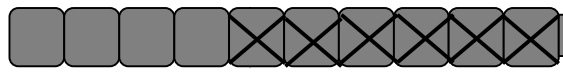
1. Λύνω κάθε εξίσωση και με τους δύο τρόπους όπως έμαθα:



13 - 6 = 7

13 - 3 = 10

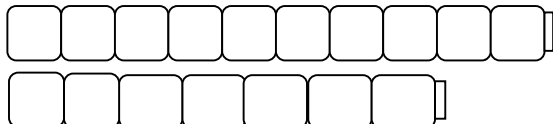
10 - 3 = 7



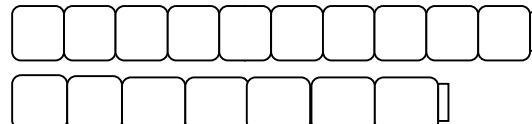
13 - 6 = 7

10 - 6 = 4

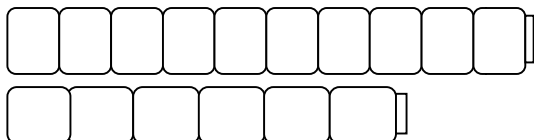
4 + 3 = 7



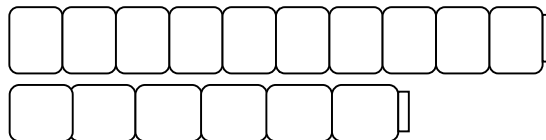
17 - 8 =



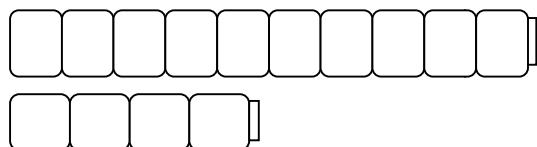
17 - 8 =



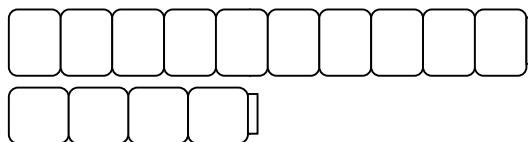
16 - 9 =




16 - 9 =



14 - 6 =



14 - 6 =



$15 - 8 =$



$15 - 8 =$

$12 - 4 =$



$12 - 4 =$

$13 - 5 =$



$13 - 5 =$

$16 - 8 =$

$16 - 8 =$

$11 - 7 =$



$11 - 7 =$
