



ΦΥΛΛΑΔΙΟ 1: ΤΕΤΡΑΨΗΦΙΟΙ ΑΡΙΘΜΟΙ

ΜΑΘΗΜΑΤΙΚΑ Γ' - ΕΝΟΤΗΤΑ 6

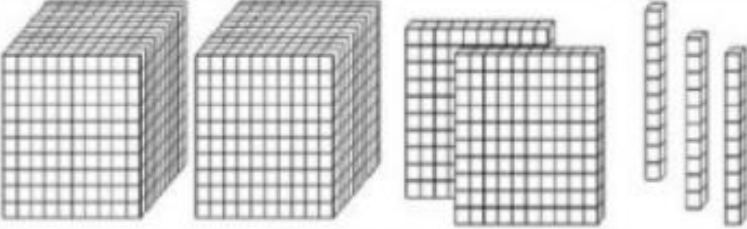
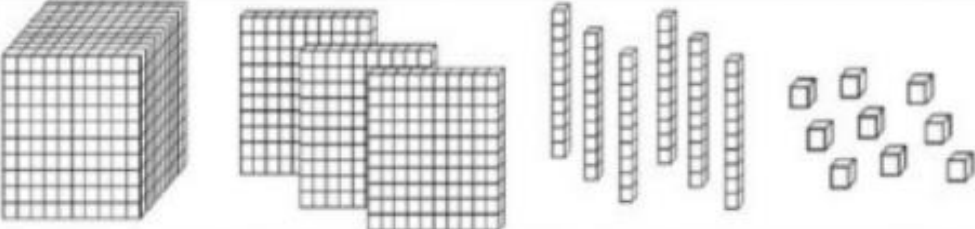
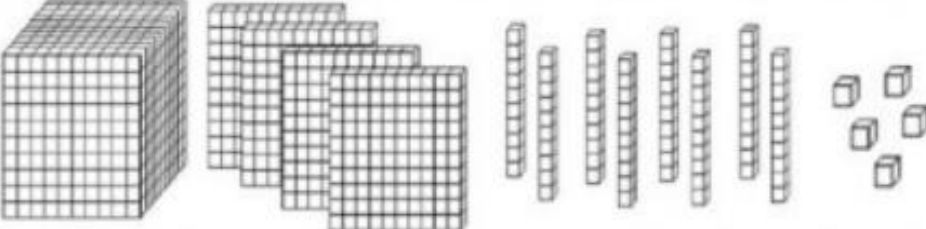
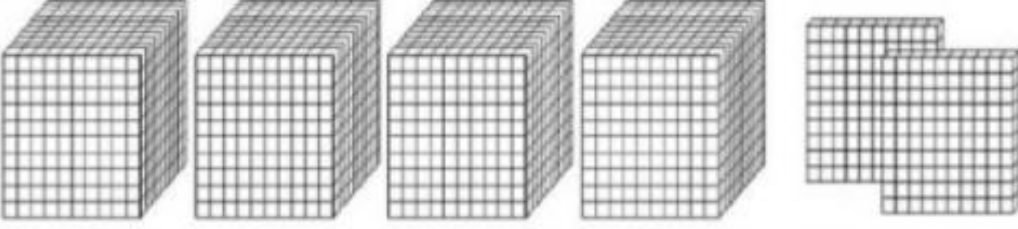
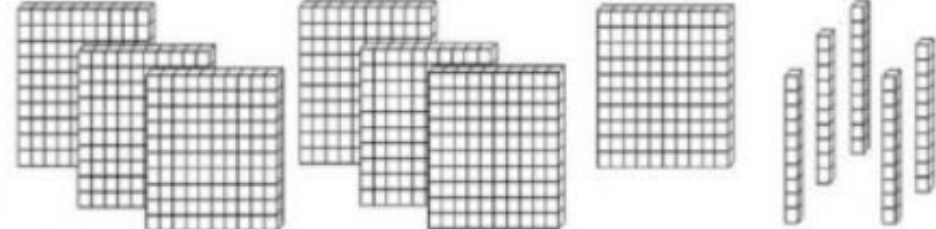
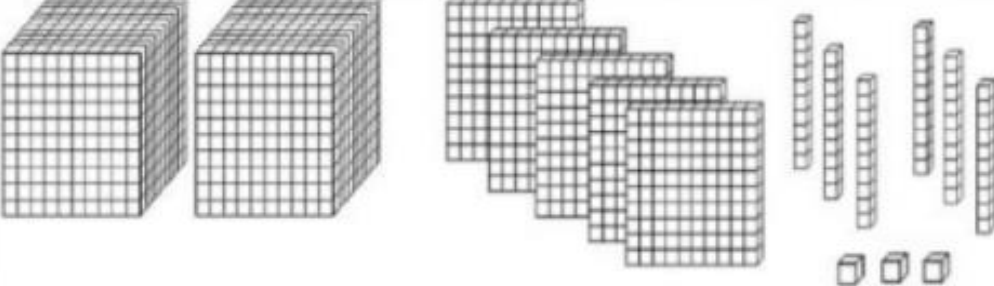
1. Αντιστοιχίζω

Αν η άσκηση γίνει στο τετράδιο απλά γράψετε με τη σειρά τους αριθμούς

	2130
	3040
	1536
	1124
	660
	1306



2. Γράφω τον αριθμό

	..
	
	
	
	
	



3. Γράφω τον αριθμό

A)

Diagram A shows base ten blocks representing the number 2153. It consists of 2 red thousands, 15 blue hundreds, 3 green tens, and 1 yellow one. Below the blocks is a large empty rounded rectangle for writing the number.

B)

Diagram B shows base ten blocks representing the number 3400. It consists of 3 red thousands, 4 blue hundreds, and 10 green tens. Below the blocks is a large empty rounded rectangle for writing the number.